






Tommy + Tallulah

Help Tommy and Tallulah figure out how to combine their card making supplies! Write the addition equation for each.

Tommy



Tallulah




$$\underline{2} + \underline{3} = \underline{5}$$

$$\underline{\quad} + \underline{\quad} = \underline{\quad}$$

$$\underline{\quad} + \underline{\quad} = \underline{\quad}$$

$$\underline{\quad} + \underline{\quad} = \underline{\quad}$$

You draw the picture!



Tommy has 4 stickers.



Tallulah has 3 stickers.

$$\underline{\quad} + \underline{\quad} = \underline{\quad}$$

How many stickers do they have?

